




I'm not robot



reCAPTCHA


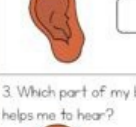
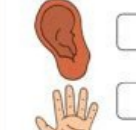

Next





Name: _____ Date: _____ Period: _____
 Solve each word problem in the work column. Round to the nearest hundredth. Cut apart the answers and glue the correct answer in the answer column.

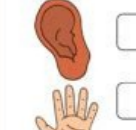



PI Day Solve and Snip	Show Work!	Answer
1. Allen works at Pizza Palace. One day when he was creating a batch of large pepperoni pizzas, he began to wonder how much a 14" pizza is covered if $1\frac{1}{2}$ " around the circumference is crust?		
2. Olivia ordered a 12" cookie cake for her birthday. She requested the icing to have a sun covering the center and be 8" in diameter. How much of Olivia's cookie cake wasn't covered by icing?		
3. Chelsea decided to bake a 3-layer cake for her dad's birthday. Each of the layers are 9" in diameter. How many square inches are covered by the cake when the layers are stacked onto each other?		
4. Jack wants to cover the top of his chocolate pie with crushed cookie crumbs. Jack's pie has a diameter of 8" with a $\frac{1}{2}$ " crust. How much area will Jack need to cover with cookie crumbs?		
5. Wyatt notices that a local pizza parlor is running a special on their 16" Supreme Thin Crust pizza with no crust around the outer edge. If Wyatt ordered 3 pizzas, what would the total area of the three pizzas be when put them on the counter?		





©K5 Learning

My 5 Senses

1. Which part of my body helps me to see?
 
 

2. Which part of my body helps me to smell?
 
 

3. Which part of my body helps me to hear?
 
 

4. Which part of my body helps me to taste?
 
 

Materials and their properties

1. Some things are made of wood.
 Circle the pictures that show something made of wood.

2. Some things are made of glass.
 Circle the pictures that show something made of glass.

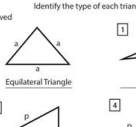
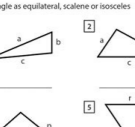
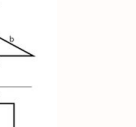
3. Some things are made of metal.
 Circle the pictures that show something made of metal.

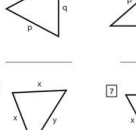
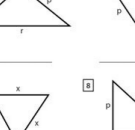

   

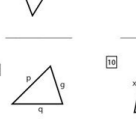
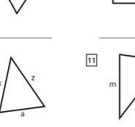
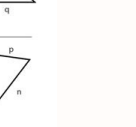
Name: _____ Date: _____

Score: _____

Circle Type of Triangle

1.   

2.   

3.   

4. 